


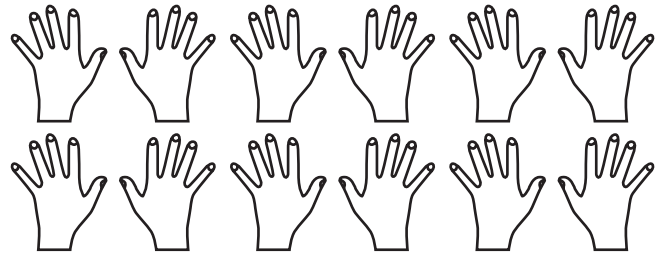
La table de 21. Laquelle des ces 2 familles a le plus de membres :

Famille Dupont

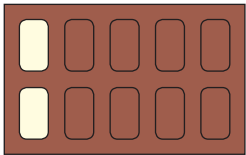


$$__ \times 2 = __$$

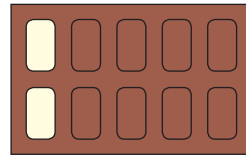
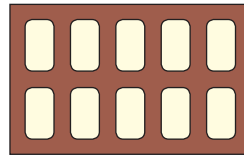
Famille Lenoir



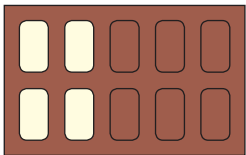
$$__ \times 2 = __$$

2. La table de 2 :

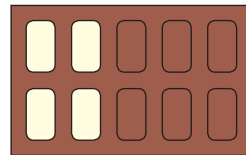
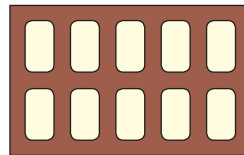
$$1 \times 2 = __$$



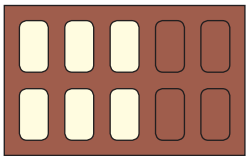
$$6 \times 2 = __$$



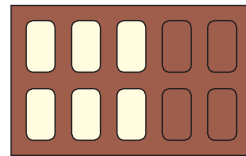
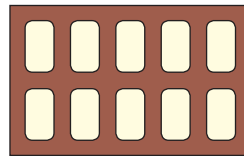
$$2 \times 2 = __$$



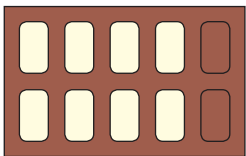
$$7 \times 2 = __$$



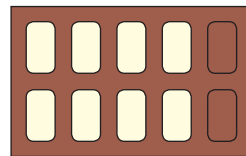
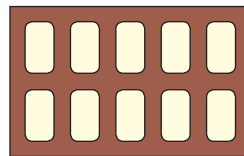
$$3 \times 2 = __$$



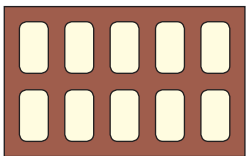
$$8 \times 2 = __$$



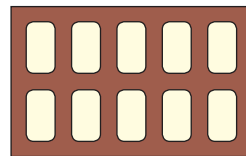
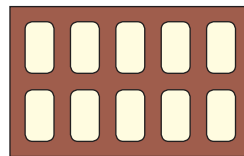
$$4 \times 2 = __$$



$$9 \times 2 = __$$



$$5 \times 2 = __$$



$$10 \times 2 = __$$

3. Pour chaque bonne réponse, tu marques 1 point :

$$0 \times 2 = __$$

$$3 \times 2 = __$$

$$4 \times 2 = __$$

$$7 \times 2 = __$$

$$1 \times 2 = __$$

$$8 \times 2 = __$$

$$4 \times 2 = __$$

$$8 \times 2 = __$$

$$0 \times 2 = __$$

$$6 \times 2 = __$$

$$2 \times 2 = __$$

$$9 \times 2 = __$$

$$9 \times 2 = __$$

$$5 \times 2 = __$$

$$6 \times 2 = __$$

