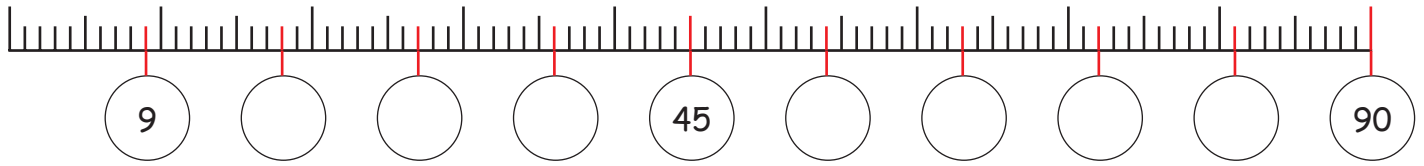



La table de 9


1. Complète la suite de l'échelle



2. Le double




$1 \times 9 = 9$




$2 \times 9 = \underline{\quad}$



$3 \times 9 = \underline{\quad}$



$4 \times 9 = \underline{\quad}$




$6 \times 9 = \underline{\quad}$




$8 \times 9 = \underline{\quad}$




$7 \times 9 = \underline{\quad}$




3. La moitié




$10 \times 9 = \underline{\quad}$



$10 \times 9 = \underline{\quad}$



$5 \times 9 = \underline{\quad}$



$9 \times 9 = \underline{\quad}$

4. Un tableau de prix

Pièce	Prix	Pièce	Prix
1	9 €	6	€
2	€	7	€
3	€	8	€
4	€	9	€
5	€	10	€



une part de gâteau coûte 9 € !

5. Famille Neuf

Colorie les chiffres qui sont divisibles par 9.

9									
6	45	3	98	21	14				
18	35	58	23	36	11				
4	86	27	95	0	43	54	2	78	63
72	69	34	81	62	90	29	47	9	84