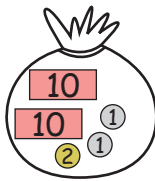

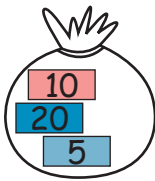



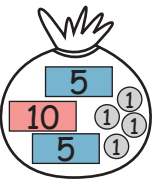







Les comparaisons


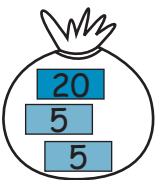
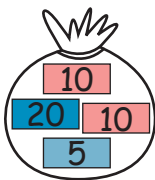


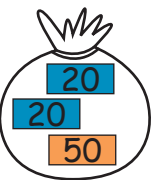

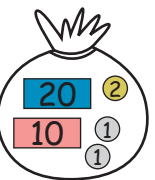
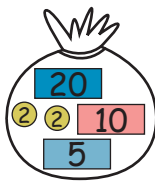


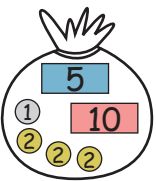



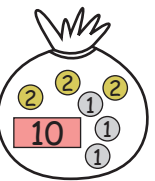
1. Egal (=) ou différent (≠)

								
___	○	___	___	○	___	___	○	___

2. Lequel de ces phares est le plus haut ?

			
2	○	4	5
○		○	3

3. Compare les sacs et complète avec le signe < (plus petit que) ou > (plus grand que) :

								
___	○	___	___	○	___	___	○	___
								
___	○	___	___	○	___	___	○	___

4. Compare les chiffres et complète avec le signe < (plus petit que) ou > (plus grand que) :

23 ○ 25	16 ○ 60	96 ○ 69	82 ○ 56	59 ○ 95
19 ○ 17	55 ○ 44	62 ○ 26	10 ○ 50	43 ○ 34
40 ○ 30	30 ○ 3	45 ○ 54	46 ○ 64	81 ○ 18
90 ○ 6	22 ○ 66	11 ○ 8	73 ○ 37	63 ○ 36