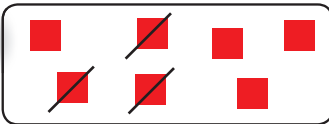
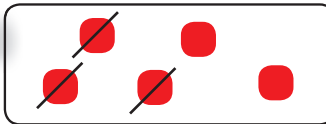



Déduire combien ?

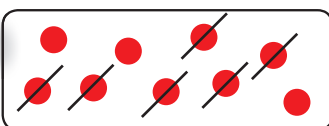


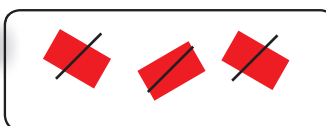
1. Barre et calcule.

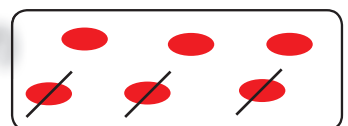
a) 
 $7 - 3 = 4$

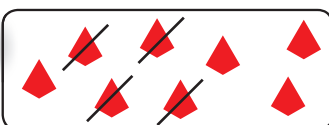
b) 
 $5 - 3 = 2$

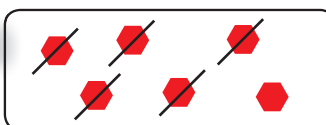
c) 
 $9 - 4 = 5$


d) 
 $9 - 6 = 3$


e) 
 $3 - 3 = 0$

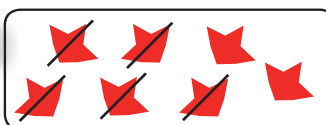
f) 
 $6 - 3 = 3$

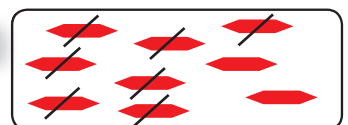
g) 
 $8 - 4 = 4$

h) 
 $6 - 5 = 1$

i) 
 $2 - 2 = 0$

j) 
 $4 - 1 = 3$

k) 
 $7 - 5 = 2$

l) 
 $9 - 7 = 2$

2. Complète les chiffres manquants.

a) $5 - 3 = 2$

f) $8 - 5 = 3$

k) $1 - 1 = 0$

p) $8 - 3 = 5$

b) $9 - 2 = 7$

g) $3 - 1 = 2$

l) $5 - 2 = 3$

q) $5 - 1 = 4$

c) $2 - 2 = 0$

h) $4 - 2 = 2$

m) $7 - 1 = 6$

r) $6 - 3 = 3$

d) $6 - 4 = 2$

i) $7 - 4 = 3$

n) $9 - 4 = 5$

s) $9 - 3 = 6$

e) $4 - 1 = 3$

j) $9 - 6 = 3$

o) $3 - 0 = 3$

t) $7 - 6 = 1$