


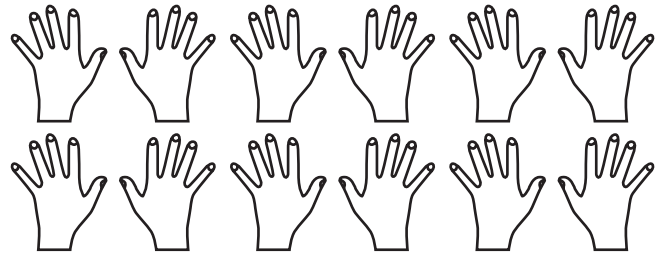
La table de 21. Laquelle des ces 2 familles a le plus de membres :

Famille Dupont

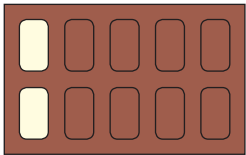


$$4 \times 2 = 8$$

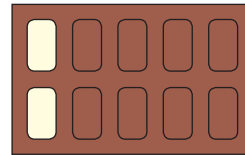
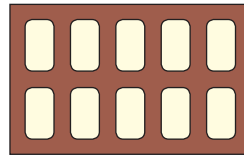
Famille Lenoir



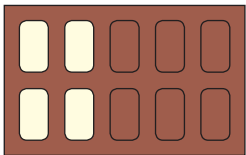
$$6 \times 2 = 12$$

2. La table de 2 :

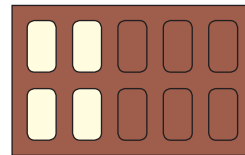
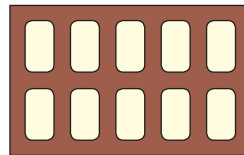
$$1 \times 2 = 2$$



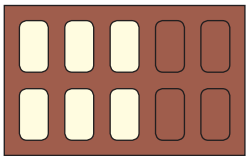
$$6 \times 2 = 12$$



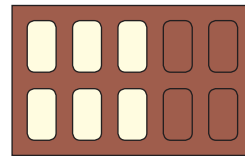
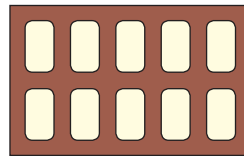
$$2 \times 2 = 4$$



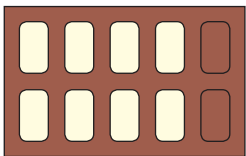
$$7 \times 2 = 14$$



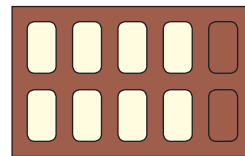
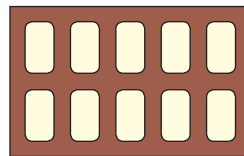
$$3 \times 2 = 6$$



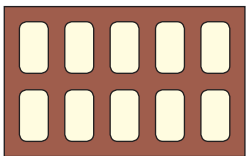
$$8 \times 2 = 16$$



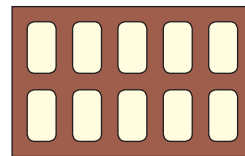
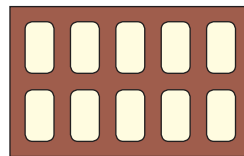
$$4 \times 2 = 8$$



$$9 \times 2 = 18$$



$$5 \times 2 = 10$$



$$10 \times 2 = 20$$

3. Pour chaque bonne réponse, tu marques 1 point :

$$0 \times 2 = 0$$

$$3 \times 2 = 6$$

$$4 \times 2 = 8$$

$$7 \times 2 = 14$$

$$1 \times 2 = 2$$

$$8 \times 2 = 16$$

$$4 \times 2 = 8$$

$$8 \times 2 = 16$$

$$0 \times 2 = 0$$

$$6 \times 2 = 12$$

$$2 \times 2 = 4$$

$$9 \times 2 = 18$$

$$9 \times 2 = 18$$

$$5 \times 2 = 10$$

$$6 \times 2 = 12$$

