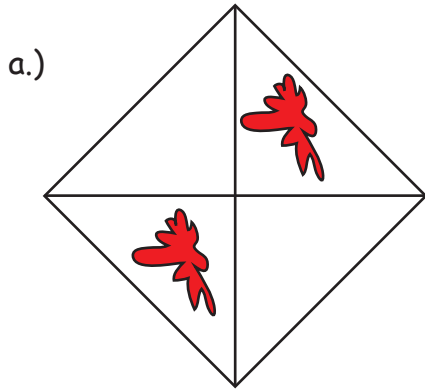
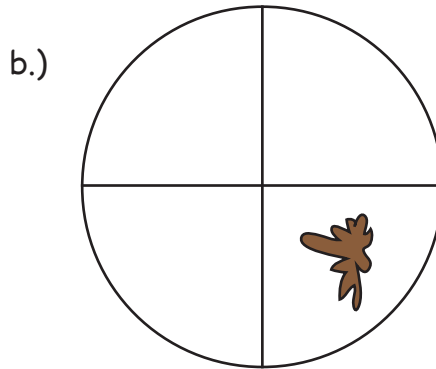


Reconnaitre les proportions et les colorier

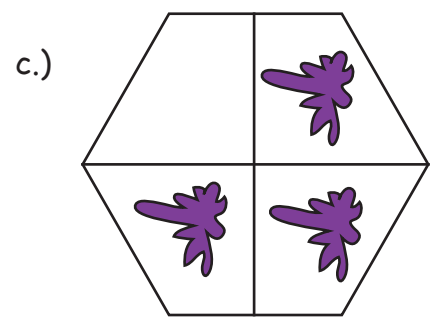
Quelle partie est coloriée ? Inscris le résultat sur la ligne !




$$\frac{2}{4} = \frac{1}{2}$$



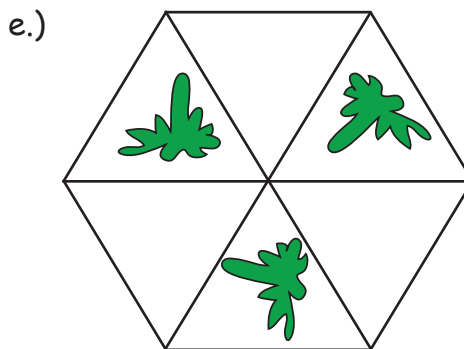
$$\frac{1}{4}$$



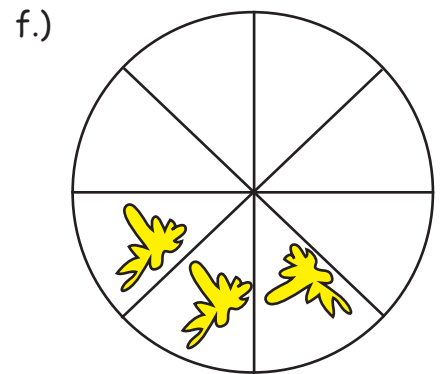
$$\frac{3}{4}$$



$$\frac{1}{2}$$



$$\frac{3}{6} = \frac{1}{2}$$



$$\frac{3}{8}$$

Coloris $\frac{1}{3}$ de chaque figure !

