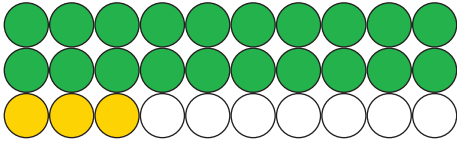


Aanvullen tot 30

1. Hoeveel ontbreken er tot 30?

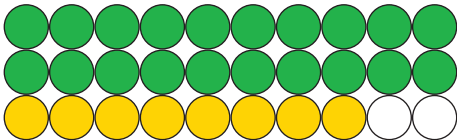
Tel de bolletjes en vul aan tot 30 zoals in het voorbeeld.



driëntwintig

T	E
2	3

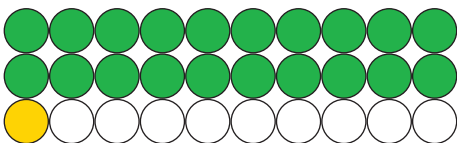
23	+	7	=	30
----	---	---	---	----



achtentwintig

T	E

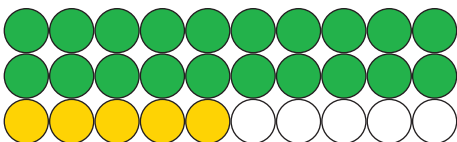
	+		=	30
--	---	--	---	----



eenentwintig

T	E

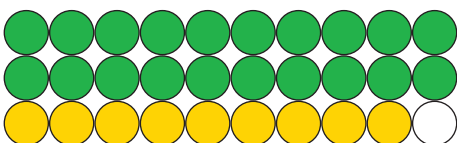
	+		=	30
--	---	--	---	----



vijfentwintig

T	E

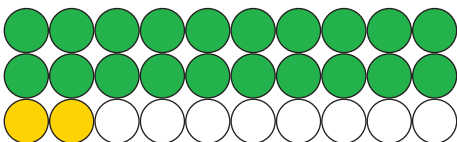
	+		=	30
--	---	--	---	----



negenentwintig

T	E

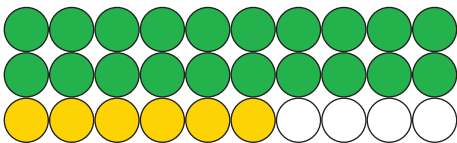
	+		=	30
--	---	--	---	----



tweeëntwintig

T	E

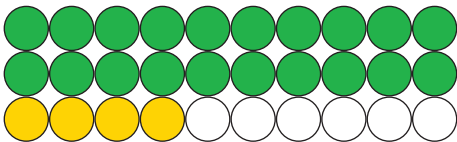
	+		=	30
--	---	--	---	----



zesentwintig

T	E

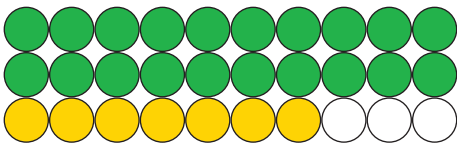
	+		=	30
--	---	--	---	----



vierentwintig

T	E

	+		=	30
--	---	--	---	----



zevenentwintig

T	E

	+		=	30
--	---	--	---	----

2. Vul de ontbrekende getallen in:

