


Correct verdelen

1. De tweeling Natasja en Chantal delen hun verjaardagscadeaus eerlijk:





$$\begin{array}{ccccccc} 8 & \text{gedeelt door} & 2 & \text{is} & 4 \\ 8 & : & 2 & = & 4 \end{array}$$




6 gedeelt door 2 is <input type="text"/>	10 gedeelt door 2 is <input type="text"/>	4 gedeelt door 2 is <input type="text"/>
6 : 2 = <input type="text"/>	10 : 2 = <input type="text"/>	4 : 2 = <input type="text"/>

2. Delen door 3:





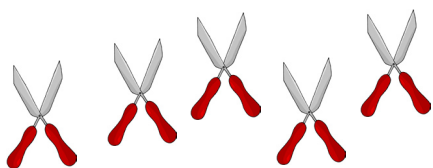
9 gedeelt door 3 is <input type="text"/>	3 gedeelt door 3 is <input type="text"/>	12 gedeelt door 3 is <input type="text"/>
9 : 3 = <input type="text"/>	3 : 3 = <input type="text"/>	12 : 3 = <input type="text"/>

3. Delen door 4:



12 gedeelt door 4 is <input type="text"/>	8 gedeelt door 4 is <input type="text"/>	4 gedeelt door 4 is <input type="text"/>
12 : 4 = <input type="text"/>	8 : 4 = <input type="text"/>	4 : 4 = <input type="text"/>

4. Delen door 5:



5 gedeelt door 5 is <input type="text"/>	15 gedeelt door 5 is <input type="text"/>	10 gedeelt door 5 is <input type="text"/>
5 : 5 = <input type="text"/>	15 : 5 = <input type="text"/>	10 : 5 = <input type="text"/>