

Getallenlijn tot 30

1. Getallen in de juiste volgorde zetten:

Rangschik de getallen op grootte. Begin met de kleinste.

1	14	23	6	18	3	29	17	4	12	25	16	19	5	30
□	□	□	□	□	□	□	□	□	□	□	□	□	□	□

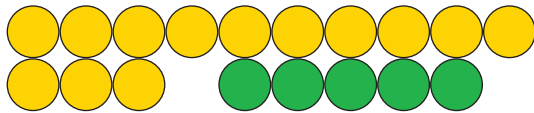
2. Kun je de overeenkomsten herkennen?



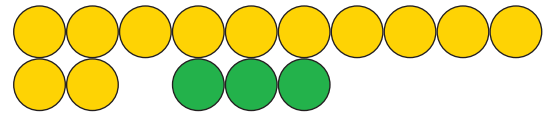
3	+	5	=	□
---	---	---	---	---



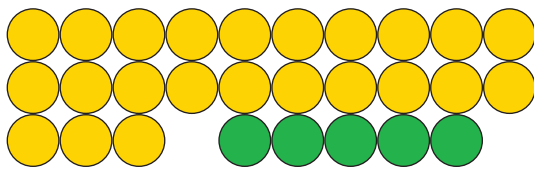
2	+	3	=	□
---	---	---	---	---



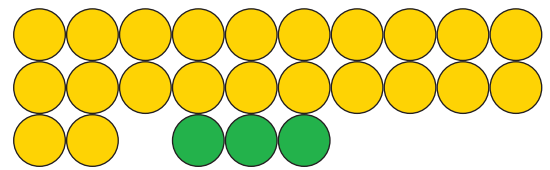
13	+	5	=	□
----	---	---	---	---



12	+	3	=	□
----	---	---	---	---



23	+	5	=	□
----	---	---	---	---



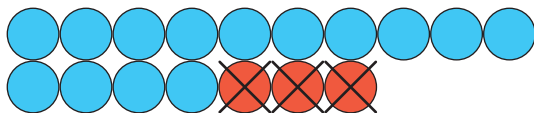
22	+	3	=	□
----	---	---	---	---



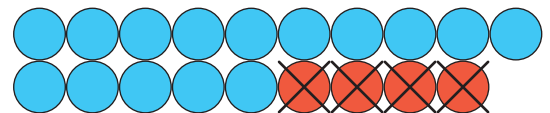
7	-	3	=	□
---	---	---	---	---



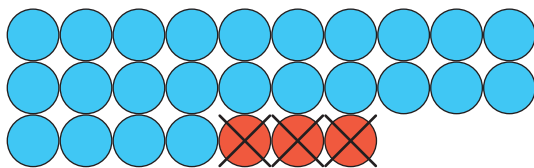
9	-	4	=	□
---	---	---	---	---



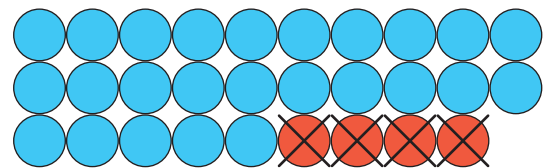
17	-	3	=	□
----	---	---	---	---



19	-	4	=	□
----	---	---	---	---



27	-	3	=	□
----	---	---	---	---



29	-	4	=	□
----	---	---	---	---