
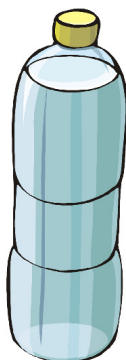


Meer of minder dan 1 liter


1. Meer of minder dan 1 liter?



minder



2. Omcirkel, waar je denkt, dat precies 1 liter in zit. Controleer dit daarna!



3. Meet nu zelf de inhoud van enkele verpakkingen!