













## Oefeningen tot 4



Vervolledig de rijen:

4		4		
4	••	4	••	
4	▼▼	4	▼▼	

Los de sommen op:

			
$1 + 1 = \underline{\quad}$	$2 + 1 = \underline{\quad}$	$1 + 2 = \underline{\quad}$	$2 + 2 = \underline{\quad}$
			
$1 + 3 = \underline{\quad}$	$3 + 1 = \underline{\quad}$	$2 + 0 = \underline{\quad}$	$0 + 3 = \underline{\quad}$
			
$2 + 2 = \underline{\quad}$	$1 + 1 = \underline{\quad}$	$2 + 1 = \underline{\quad}$	$4 + 0 = \underline{\quad}$