


Oefeningen tot 6

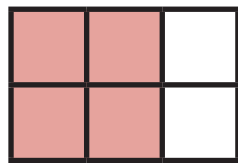
Voltooi de rijen:

6 6		
6 :: 6 ::		
6 6 6		

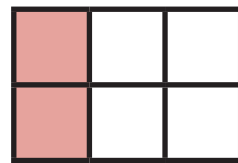
Kleur de vakjes in en los de sommen op:



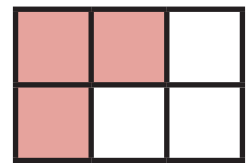
$5 + 1 = \underline{\quad}$



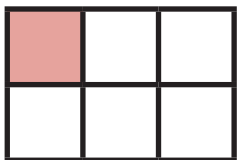
$4 + \underline{\quad} = \underline{\quad}$



$2 + \underline{\quad} = \underline{\quad}$




$3 + \underline{\quad} = \underline{\quad}$



$1 + \underline{\quad} = \underline{\quad}$



$0 + \underline{\quad} = \underline{\quad}$



$6 + \underline{\quad} = \underline{\quad}$



Schrijf het aantal in de vakjes:
