



Oefeningen tot 9


Vul de lijnen:

9  9


9  9

9 9 9


Schrijf de bijpassende sommen op:




$8 + 1 = \underline{\quad}$




$5 + \underline{\quad} = \underline{\quad}$




$\underline{\quad} + \underline{\quad} = \underline{\quad}$




$\underline{\quad} + \underline{\quad} = \underline{\quad}$




$\underline{\quad} + \underline{\quad} = \underline{\quad}$



$\underline{\quad} + \underline{\quad} = \underline{\quad}$



$\underline{\quad} + \underline{\quad} = \underline{\quad}$



$\underline{\quad} + \underline{\quad} = \underline{\quad}$

Bereken:

$2 + 7 = \underline{\quad}$
 $4 + 5 = \underline{\quad}$
 $8 + 1 = \underline{\quad}$
 $7 + 2 = \underline{\quad}$
 $1 + 8 = \underline{\quad}$

$3 + 6 = \underline{\quad}$
 $5 + 4 = \underline{\quad}$
 $0 + 9 = \underline{\quad}$
 $6 + 3 = \underline{\quad}$
 $9 + 0 = \underline{\quad}$

$9 - 0 = \underline{\quad}$
 $9 - 1 = \underline{\quad}$
 $9 - 2 = \underline{\quad}$
 $9 - 3 = \underline{\quad}$
 $9 - 4 = \underline{\quad}$

$9 - 5 = \underline{\quad}$
 $9 - 6 = \underline{\quad}$
 $9 - 7 = \underline{\quad}$
 $9 - 8 = \underline{\quad}$
 $9 - 9 = \underline{\quad}$