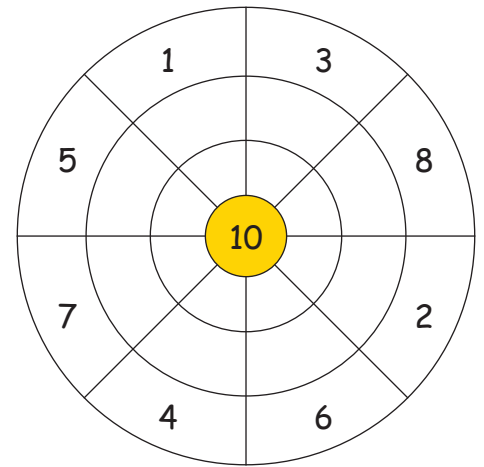
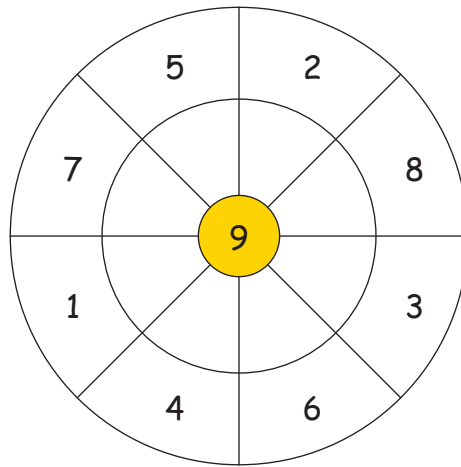
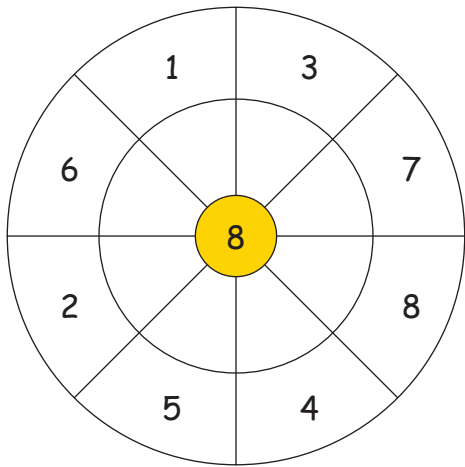


Ontdekken en invullen


1. Rekencirkels:



2. Omgekeerde sommen:

Reken eerst de optelsommen uit en daarna de aftreksommen. Valt je hierbij iets op?

4	+	6	=	
9	+	1	=	
2	+	8	=	
5	+	5	=	
3	+	7	=	
0	+	10	=	
8	+	2	=	
1	+	9	=	
6	+	4	=	
7	+	3	=	



10	-	6	=	
10	-	1	=	
10	-	8	=	
10	-	5	=	
10	-	7	=	
10	-	10	=	
10	-	2	=	
10	-	9	=	
10	-	4	=	
10	-	3	=	

3. Meerdere rekenwegen:

$$\begin{array}{r}
 2 + \underline{\quad} \\
 3 + \underline{\quad} \\
 5 + \underline{\quad}
 \end{array}
 \quad
 \begin{array}{r}
 9 + \underline{\quad} \\
 1 + \underline{\quad}
 \end{array}$$

9

$$\begin{array}{r}
 1 + \underline{\quad} \\
 4 + \underline{\quad} \\
 2 + \underline{\quad}
 \end{array}
 \quad
 \begin{array}{r}
 6 + \underline{\quad} \\
 0 + \underline{\quad}
 \end{array}$$

7