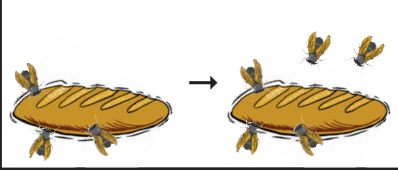
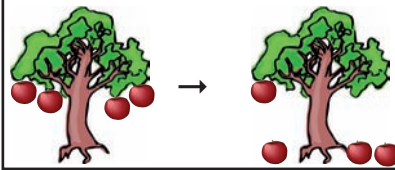
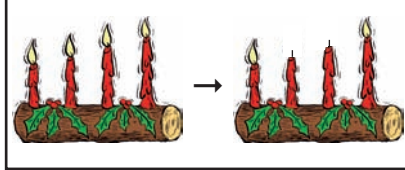



Rekenverhalen

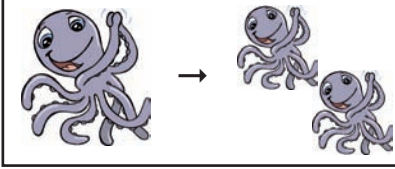
Vul de ontbrekende getallen in.

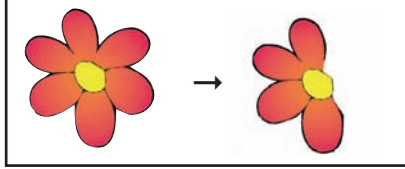
a) 
 $3 + \square = 5$

b) 
 $\square - 3 = 1$


c) 
 $4 - \square = 2$

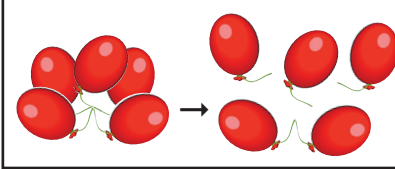
d) 
 $\square + 4 = 9$

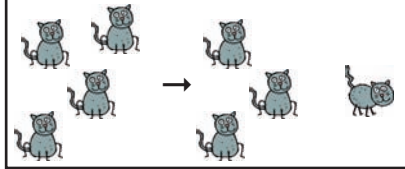
e) 
 $1 + \square = 2$

f) 
 $\square - 2 = 4$


Vul de ontbrekende getallen op basis van rekenverhalen in.


a) 
 $\square - \square = 4$


b) 
 $\square - \square = 2$


c) 
 $\square - \square = 3$


Teken rekenverhalen bij de opgaven.


a) 
 $4 - \square = 3$

b) 
 $5 + \square = 7$

c) 
 $7 - \square = 4$

d) 
 $3 - \square = 0$

e) 
 $6 - \square = 3$

f) 
 $0 + \square = 5$